







Gifted Opportunities

Grade 3

Communication skills

Complete one task for each week. Please write responses on your own paper, and be prepared to share with your Gifted Resource Teacher when you see them.	
Week 1	If someday you were to write a book, what would your book be about? Why? What would you title your book? 
Week 2	 The Wright Brothers were inventors who invented an airplane; one that worked! Columbus was an explorer who discovered a new world. What is something you would like to invent or explore? Explain your ideas.
Week 3	If you could have your own YouTube channel, what would it be about? Describe an episode you would want to show. 
Don't forget to read every day!!	

Mathematics

Complete one task for each week. Please write responses on your own paper, and be prepared to share with your Gifted Resource Teacher when you see them.	
Week 1 	Basketball Cards: Brenda and Marcus like to collect basketball cards. They counted all the cards they had in their collections. Brenda had 25 cards already, and her sister said she would give her 5 cards each week if she helped her dry the dinner dishes. Richard already had 40 cards, and his sister said she would give him three cards each week if he would help her take out the trash. Brenda and Richard were excited to get more cards. Richards said that he will always have more cards than Brenda. Brenda disagrees. Who is right? Show all of your mathematical thinking.
Week 2 	Helping the Youth Center: Sally wanted to raise \$10.00 to but art supplies for the Youth Center. She decided to ask her family and friends to save redeemable bottles so she could return them to the store every Saturday to collect the deposit. She would receive \$.05 for each bottle she returned. Sally received \$.60 on the first Saturday she returned the bottles. One the second Saturday, she received \$.90, and on the third Saturday she received \$1.20. On the fourth Saturday she received \$1.50. Use your mathematical thinking to tell Sally when she will have raised enough money to buy the art supplies.
Week 3 	Stickers for Papers: Anthony loves to put stickers on his papers. He has 15 insect stickers, 21 bird stickers, and 47 fish stickers. Anthony has 40 papers to decorate. He decided to put a fish sticker on each paper. He decided to put a bird sticker on every fourth paper, and an insect on every fifth paper. When Anthony gets done putting stickers on the papers, how many papers will have all 3 kinds of stickers on them?